

# Testbogen Newcomer-Abzeichen THEORIE



1. Wähle den Schlüssel deines Instruments. Welche Note kennzeichnet er? (Kreuze an!)




g<sup>1</sup>     h<sup>1</sup>     d<sup>1</sup>

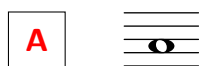
f     g     e

2. Ordne den Begriffen die Notenwerte zu!


A Ganze Note




B Achtelnote



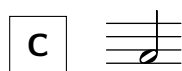

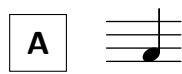
C Viertelnote



D Halbe Note



3. Welche Noten haben die gleiche Dauer? (Ordne zu!)



4. Was bedeuten folgende Zeichen? (Ordne zu!)

A *f*

A laut/stark spielen

B *p*

B leise spielen

1

4

3

2

10

# GEHÖRBILDUNG

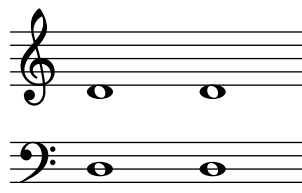

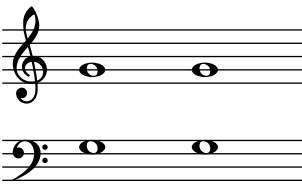
10

5. Welcher Rhythmus wurde gespielt? (Kreuze an!)

1	<input type="checkbox"/>		<input checked="" type="checkbox"/>	
2	<input type="checkbox"/>		<input checked="" type="checkbox"/>	
3	<input checked="" type="checkbox"/>		<input type="checkbox"/>	
4	<input checked="" type="checkbox"/>		<input type="checkbox"/>	

4

6. Wähle den Schlüssel deines Instrumentes. Welche Töne wurden gespielt? (Kreuze an!)

1	<input checked="" type="checkbox"/>		<input type="checkbox"/>	
2	<input type="checkbox"/>		<input checked="" type="checkbox"/>	
3	<input checked="" type="checkbox"/>		<input type="checkbox"/>	

3

17