

Testbogen Newcomer-Abzeichen THEORIE



1. Wähle den Schlüssel deines Instruments. Welche Note kennzeichnet er? (Kreuze an!)




d¹ e¹ g¹

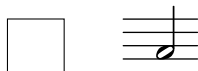
d e f

2. Ordne den Begriffen die Notenwerte zu!


A Ganze Note



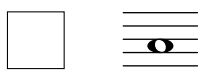
B Achtelnote



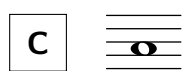
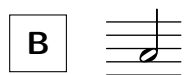
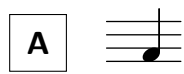
C Halbe Note



D Viertelnote



3. Welche Noten haben die gleiche Dauer? (Ordne zu!)



4. Was bedeuten folgende Zeichen? (Ordne zu!)

A *p*

leise spielen

B *f*

laut/stark spielen

1

4

3

2

10

GEHÖRBILDUNG

10

5. Welcher Rhythmus wurde gespielt? (Kreuze an!)

| | | | | |
|---|--------------------------|--|--------------------------|--|
| 1 | <input type="checkbox"/> | | <input type="checkbox"/> | |
| 2 | <input type="checkbox"/> | | <input type="checkbox"/> | |
| 3 | <input type="checkbox"/> | | <input type="checkbox"/> | |
| 4 | <input type="checkbox"/> | | <input type="checkbox"/> | |

4

6. Wähle den Schlüssel deines Instrumentes. Welche Töne wurden gespielt? (Kreuze an!)

| | | | | |
|---|--------------------------|--|--------------------------|--|
| 1 | <input type="checkbox"/> | | <input type="checkbox"/> | |
| 2 | <input type="checkbox"/> | | <input type="checkbox"/> | |
| 3 | <input type="checkbox"/> | | <input type="checkbox"/> | |

3

17